

PONVIDYASHRAM GROUP OF SCHOOLS

PERIODIC TEST – I – 2017-18

MATHS WORKSHEET - 1

STANDARD-ONE

I. WRITE THE NUMBER NAMES FOR THE FOLLOWING NUMERALS:-

- a. 44 - _____
- b. 12 - _____
- c. 27 - _____
- d. 61 - _____
- e. 35 - _____

II. WRITE THE NUMERALS FOR THE FOLLOWING:

- a. Forty three - _____
- b. Seventy - _____
- c. Sixty six - _____
- d. Twenty eight - _____
- e. Eleven - _____
- f. Thirty nine - _____

III. WRITE THE PLACE VALUE OF THE UNDERLINED NUMERALS:

H T U

- A. 8 7
- B. 1 0 0
- C. 3 8
- D. 5 3

E. 2 4

IV. WRITE THE MISSING NUMBERS:

A.

43, _____, _____, _____, _____, _____, _____, 50

B. T U T U T U

1 1 2 1 6 2

— — —

— — —

— — —

— — —

1 6 2 6 6 7

V. WRITE BEFORE , AFTER AND BETWEEN NUMERALS:-

a. _____ 4

b. _____ 55

c. 12 _____

d. 90 _____

e. 63 _____ 65

f. 42 _____ 44

g. _____ 82

h. 49 _____

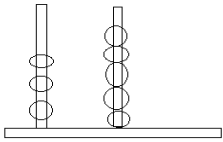
i. _____ 60

j. 51 _____

k. 71 _____ 73

m. 33 _____ 35

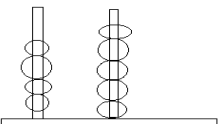
VI. COUNT THE BEADS AND WRITE THE PLACE VALUE FOR THE FOLLOWING :

1.  ___ TENS + ___ UNITS

2.  ___ TENS + ___ UNITS

3.  ___ TENS + ___ UNITS

4.  ___ TENS + ___ UNITS

5.  ___ TENS+ ___ UNITS

VII. CIRCLE THE SMALLEST NUMBERS:-

a. 82, 64, 13, 70

b. 42, 8, 24, 99

c. 53, 49, 83, 98

d. 9, 61, 21, 43

e. 20, 33, 74, 80

VIII. CIRCLE THE BIGGEST NUMBERS:-

a. 94, 72, 64, 86

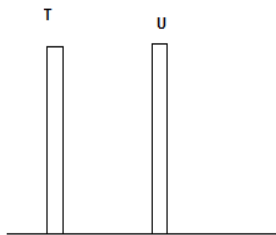
b. 39, 88, 62, 43

c. 29, 48, 69, 31

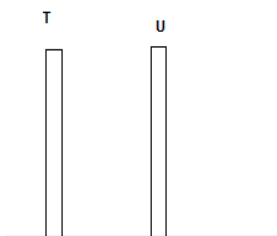
d. 18, 55, 45, 95

IX. LOOK AT THE NUMERALS AND DRAW BEADS UNDER CORRECT PLACE VALUE:-

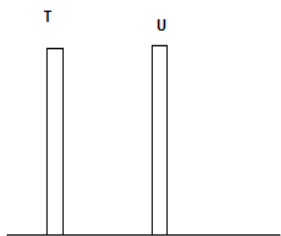
T U



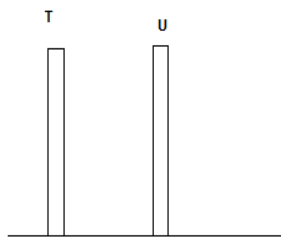
A. $\underline{\hspace{2cm}}$ 27



B. $\underline{\hspace{2cm}}$ 42



C. _ 34



D. _ 61



E. _ 74