

PON VIDYASHRAM

HALF YEARLY WORKSHEET 2017-2018

STD V

Sub: Social Science

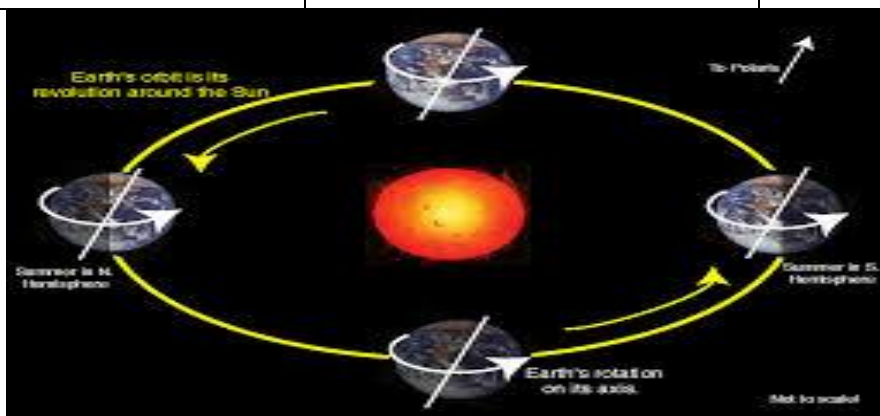
MOVEMENTS OF THE EARTH

I GUESS ME :

1. I am oval in shape _____
2. The earth rotates on me _____
- 3, I have 366 days in a year _____
4. I cause seasons _____
5. The earth moves around me _____

II Fill In :

Position	Northern hemisphere	Southern hemisphere
1		
2		
3		
4		



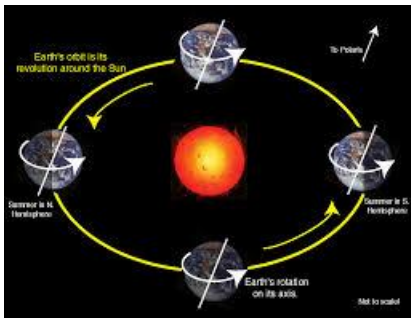
III Distinguish between

1. Rotation and Revolution

IV. Think and Answer :

The length of days and nights become the same throughout the world. It is neither too hot nor too cold in both the hemisphere why ?


V Look at the pictures and answer the question



What is it ? _____

How long does it take _____

What does it cause _____

	<p>What is it ? _____</p> <p>How long does it take _____</p> <p>What does it cause _____</p>
---	---

VI Fill in:

1. The earth rotates, all places have day and night , but at _____ times
2. While rotating on its axis, the earth also _____ around the sun.
3. Due to its _____ shape, only half of the earth receives light from the sun at a particular time.
4. In ancient times people believes that the earth was _____
5. In summer the days are _____ than the night.
- 6..The earth rotates from _____
7. _____ is the longest day in a year.

Define :

1. Leap year
2. Eclipse

PONVIDYASHRAM

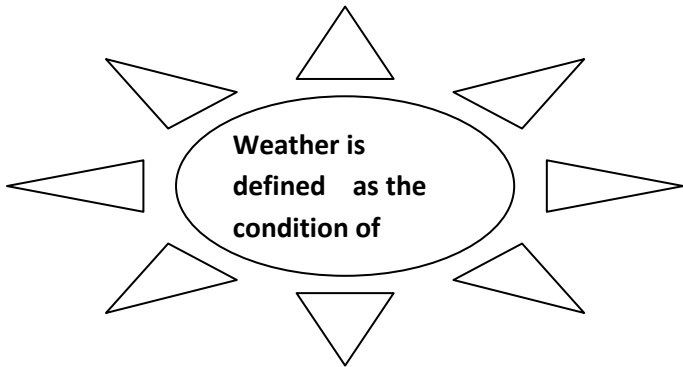
HALF YEARLY WORKSHEET 2017-2018

STD V

Sub : Social Science

WEATHER AND CLIMATE

I Fill in



II. Complete the table :

Moderate climate	
Extreme climate	
	Mawsynram
Coldest climate	

III Find out the words related to weather and climate

S R K F E C T H U K

Q S T O R M H A I L

J F O G S A U N X R

I H R T U S N O W A

W I N D N M D P I G

C D A Q N X E T U Z

F E D N Y B R A I N

C L O U D S K X S H

IV Answer in short

- 1) Write the factors that influence weather?
- 2) List the factors that influence climate?
- 3) How is the Earth divided on the basis of difference in their temperature?

V Answer in one word

- 1) Distance above the sea level-**
- 2) Moisture or vapour present in air –**
- 3) The imaginary line which separates the Earth –**
- 4) Zone present in the arctic circle -**
- 5) Zone which lies on both sides near the equator –**

VI Fill in the blanks

- 1) In India we enjoy three seasons _____, _____ and _____**
- 2) The places near the _____ receive more heat**
- 3) _____ is the highest mountain in Africa**
- 4) The _____ of a place decreases as the altitude increases**
- 5) _____ make northern India very cold**

VII Define

- 1) Sea breeze:**
- 2) Extreme climate:**
- 3) Green house effect:**

VIII Give reason

Shimla and Ludhiana are almost at the same distance from the equator. Then why is Shimla much colder than Ludhiana ?

PONVIDYASHRAM

HALF YEARLY WORKSHEET 2017-2018

STD V

Sub :Social Science

INDIA WINS FREEDOM

I. Define

- 1) Nationalism**
- 2) Racist policy**
- 3) PurnaSwaraj**

II. Fill In

- 1) Indian national army was also known as _____**
- 2) Gandhiji and his followers walked from _____ to Dhandi along the coast of Gujarat**
- 3) Gandhiji was shocked by the _____**
- 4) The JallianwalaBaghMassacre also known as the _____**
- 5) The British was forced to reunite Bengal in _____**
- 6) They made huge bonfires of _____ made goods**
- 7) India became free on _____**
- 8) Gandhi asked the people to _____ in their attempt to throw the British out of the country.**
- 9) _____ gave a speech to welcome India's independence**
- 10) On _____ Gandhiji passed away in Delhi**

III. Rewrite the events in correct order and also write the year

- 1) Partition of Bengal**

- 2) Quit India movement**
- 3) JallianWalaBagh massacre**
- 4) Civil disobedience movement**
- 5) Non co-operation movement**
- 6) India got freedom**
- 7) Gandhiji returns to India**

IV. Give reasons

- 1) Why did the congress boycott the Simon commission**
- 2) Why did Gandhiji start the “civil disobedience movement”/
march to Dandi**
- 3) Name the extremist leaders:**

PONVIDYASHRAM

HALF YEARLY WORKSHEET 2017-2018

STD V

Sub :Social Science

NATURAL DISASTER

I. Identify the disaster :

- 1) It's a frightening funnel and a whirling vortex _____
- 2) It's a monstreous deluge from an over abundance of rain _____
- 3) It's a crust shaking violently _____
- 4) It's a massive, watery crest with incredible power _____
- 5) It's intense, hot molten mayhem with tons of lava _____

II. Define

- 1) Rainwater Harvesting
- 2) Rescue
- 3) Victim

III. Name the following

- 1) Violent storm with every strong winds _____
- 2) Instrument that measure the force of an earthquake _____
- 3) Two drought resistant crops _____, _____
- 4) The scientific study of an earthquake _____
- 5) Strong tide or storm at sea _____

IV. Answer the following

- 1) What is focus?

- 2) What other natural disasters does earthquakes leads to?**
- 3) List 3 points to prevent drought.**
- 4) When and where did the cyclone 'hudhud' occur?**
- 5) List any 3 states affected by flood in India with the year.**